



# BPSC - AE

← ASSISTANT ENGINEER →

Civil Engineering

**Bihar Public Service Commission**

**Volume - 5**

**Hydrology & Irrigation**



# Table of Content

S No.	Chapter Title	Page No.
1	General Aspects of Hydrology	1
2	Precipitation and Its Measurements	10
3	Abstractions From Precipitation	39
4	Streamflow Measurement	54
5	Runoff	67
6	Hydrographs	86
7	Floods	117
8	Flood Routing	132
9	Groundwater	145
10	Water Requirements of Crops	160
11	Design of Stable Channels	177
12	Design of Gravity Dams	200
13	River Training and Diversion Headworks	206
14	Ground Water	216
15	Practice Sheet	226

# 1

## CHAPTER

# General Aspects of Hydrology

## THEORY

### 1.1 INTRODUCTION

Hydrology is the science of water which deals with

- Occurrence
- Circulation
- Distribution of water of the earth and earth's atmosphere.

It concerned with

- Water in streams and lakes
- Rainfall and snowfall
- Snow and ice on the land and water occurring below earth's surface in the pores of the soil and rocks.

#### 1.1.1 Classification of Hydrology

- **Scientific Hydrology** : The study concerned chiefly with academic aspects.
- **Engineering or Applied Hydrology** : Study concerned with engineering applications
  - (i) Estimation of water resources.
  - (ii) The study of processes such as precipitation, runoff, evapotranspiration and their interaction.
  - (iii) The study of problems such as floods and droughts and strategies to combat them.

### 1.2 HYDROLOGIC CYCLE

The total water of earth, excluding deep ground water, is in constant circulation from the earth (including oceans) to atmosphere and back to the earth and oceans. This cycle of water amongst earth, oceans, and atmospheric systems is known as hydrologic cycle.

- The hydrologic cycle is a global sun-driven process. The processes in this cycle extends from an average depth of 1 km in the lithosphere (crust of the earth), to a height of about 15 km in the atmosphere.
- The hydrologic cycle does not have beginning or end point. However oceans are considered as starting point for convenience of study.
- Because of heat energy provided by Sun evaporation in oceans takes place at very large scale. This water vapour moves upwards and forms clouds. Major part of these clouds condense and fall back to the oceans as in the form of rain. But some part of clouds is driven to the land areas by winds. Then they condense and precipitate onto the land mass as rain, snow, hail, sleet etc.
- A part of rainfall may evaporate back to atmosphere each while falling.

- Another part may be intercepted by vegetation, structures and other such surface modifications from which it may be either evaporated back to atmosphere or move down to the ground surface.
- A part of water that reaches ground, enters into earth's surface through infiltration, enhances the moisture content of soil and reaches to ground water.
- Through vegetation a part of water from under the ground surface to the atmosphere through the process of transpiration.
- Part of infiltrated water may to surface water bodies as interflow, while other part may become ground water flows.
- Ground water may ultimately be discharged into stream channel by a variety of paths above and below surface of the earth is called runoff.
- Once it enters a stream channel, runoff becomes stream flow.

The hydrologic cycle is usually described in terms of six major components as :

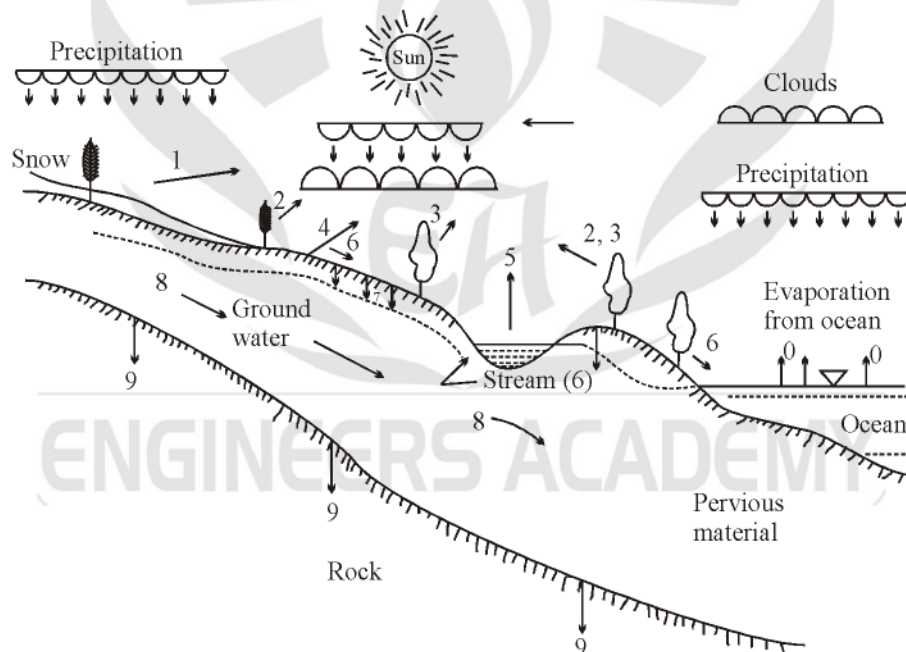
Precipitation (P), Infiltration (I)

Transpiration (T), Surface Runoff (R)

Evaporation (E), and ground water flow (G)

However for calculation purposes evaporation (E) and transpiration (T) are sometimes clubbed together as evapotranspiration (ET).

The figure given below show these components and illustrates the various paths they taken to complete hydrologic cycle.



- |                            |                                   |
|----------------------------|-----------------------------------|
| 0 = Evaporation from ocean | 1 = Raindrop evaporation          |
| 2 = Interception           | 3 = Transpiration                 |
| 4 = Evaporation from land  | 5 = Evaporation from water bodies |
| 6 = Surface runoff         | 7 = Infiltration                  |
| 8 = Groundwater            | 9 = Deep percolation              |

**Fig. 1.1 : The Hydrologic Cycle**

**Note :**

- **Evaporation** is conversion of water from liquid to gaseous state.
- **Precipitation** is the deposition of water on earth surface in the form of rain, snow, hail, frost and so on.
- **Infiltration** is the movement of water into the soil of earth's surface.
- **Percolation** is the movement of water from upper soil zone to a lower soil zone.
- **Transpiration** is the soil moisture taken up through the roots of a plant and discharged into atmosphere through the leaves of plants.
- **Storage** is the volume of water which gets stored in natural depression of a basin.
- **Runoff** is the volume of water drained by a river at the outlet of a catchment.

### 1.3 HYDROLOGICAL BUDGET

For a given catchment area in a time interval  $\Delta t$ ,

Total inflow – Total outflow = change in storage (continuity equation)

This continuity equation, expressed in terms of various phases of hydrological cycle is known as water budget equation/water budget equation.

Hydrological budget equation

$$P - R - E - T - G = \Delta S, \text{ water budget equation}$$

where

P = Precipitation

R = Net runoff

E = Net evaporation

T = Net Transpiration

G = Net Ground water flow

$\Delta S$  = Net storage change

The storage S consist of three components as

$$S = S_s + S_{sm} + S_g$$

where

$S_s$  = Surface water storage

$S_{sm}$  = Water in storage as soil moisture

$S_g$  = Water in storage as ground water

Thus, in above equation

$$\Delta S = \Delta S_s + \Delta S_{sm} + \Delta S_g$$

In terms of rainfall-runoff relationship water budget equation can be represented as

$$R = P - L$$

where

R = Runoff

P = Precipitation

L = Losses = water not available to runoff due to (I, E, T and depression storage)

All terms in above equations have the dimensions of volume however all these terms can be expressed as depth over the catchment area (e.g. in centimeters or millimeters). In fact this is a very common unit used.

#### Catchment Area

- The area of land draining into a stream or into a water course at a given location is called a catchment area.
- Other terms which are used to describe a catchment area are drainage basin, drainage area, catchment, catchment basin, river basins, water basin and watershed (in USA).
- The catchment area acts as a funnel by collecting all the water within the area covered by the catchment and channelling into a single point.

### Watershed Divide

- Each catchment area is separated topographically from adjacent catchment areas by a natural barrier such as a ridge, hill, mountain. This line is known as topographic water divide, or the watershed divide, or simply a divide.
- The divide follows ridge line around the catchment, crossing the stream only at the outlet point, it marks the highest points between the basins, but isolated peaks within a basin may be at higher elevations than any point on the divide.

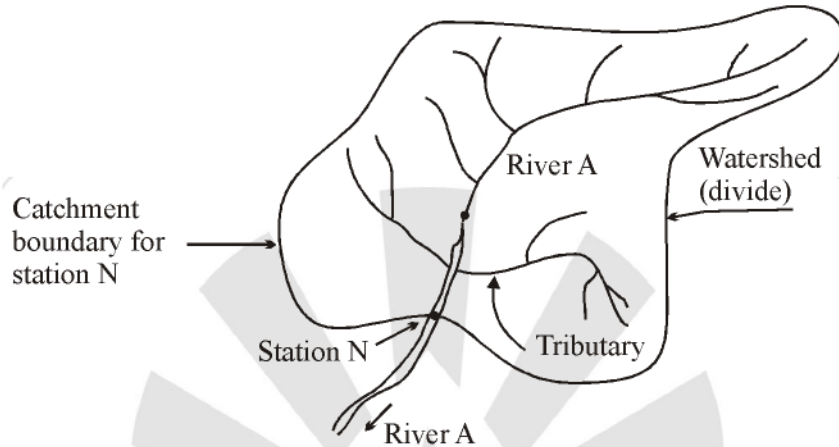


Fig. 1.2 : Schematic sketch of catchment of river A at station N.

### Catchment Leakage

Sometimes the runoff measured at the outlet of a particular catchment may contain some contribution belonging to the precipitation fallen on a neighboring catchment by way of subsurface runoff. This is known as catchment leakage.

Catchment leakage also occurs when the ground water divide and catchment divide (watershed divide) are not coincident in plan as shown in figure below

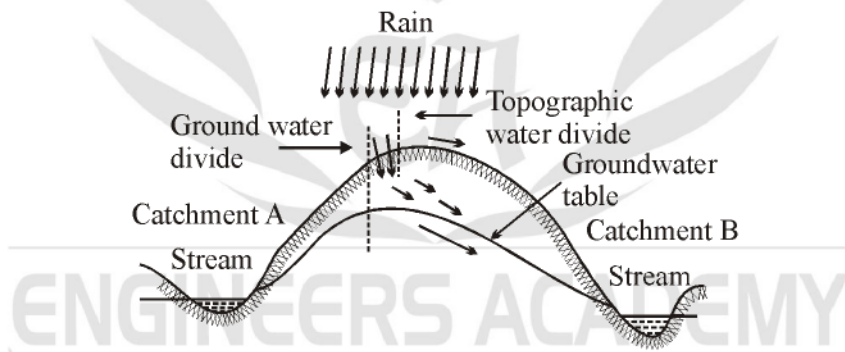


Fig. 1.3 : Topographical and ground water divide

#### Note :

- However for large catchments, ground water divide and topographical divide are assumed to coincide i.e. catchment leakages are neglected.
- Area between watershed divide on a topographic map is measured by an instrument called **Planimeter**.

### Residence Time

Average duration of a particles of water to pass through a phase of the hydrological cycle is known as the residence time of that phase.

$$\text{Residence time} = \frac{\text{Volume of water in a phase}}{\text{Average flow rate in that phase}}$$

Average residence time of ocean is larger than that of global ground water.

**Example 1 :** A lake had a water surface elevation of 103.200 m above datum at the beginning of a certain month. In that month the lake received an average inflow of  $6.0 \text{ m}^3/\text{s}$  from surface runoff sources. In the same period the outflow from the lake had an average value of  $6.5 \text{ m}^3/\text{s}$ . Further, in that month, the lake received a rainfall of 145 mm and the evaporation from the lake surface was estimated as 6.10 cm. Write the water budget equation for the lake and calculate the water surface area can be taken as 5000 ha. Assume that there is no contribution to or from the groundwater storage.

**Solution :**

Given data,

$$\begin{aligned}\bar{I} &= 6.0 \text{ m}^3/\text{s} \\ \bar{Q} &= 6.5 \text{ m}^3/\text{s} \\ P &= 145 \text{ mm} \\ E &= 61.0 \text{ mm} \\ A &= 5000 \times 10^4 \text{ m}^2\end{aligned}$$

In a time interval  $\Delta t$  the water budget for the lake can be written as Input volume-output volume = change in storage of the lake

$$(\bar{I}\Delta t + PA) - (\bar{Q}\Delta t + EA) = \Delta S$$

where,  $\bar{I}$  = average rate of inflow of water into the lake

$\bar{Q}$  = average rate of outflow from the lake

P = precipitation

E = evaporation

A = average surface area of the lake

$\Delta S$  = change in storage volume of the lake.

Here  $\Delta t = 1 \text{ month} = 30 \times 24 \times 60 \times 60 = 2.592 \times 10^6 \text{ s} = 2.592 \text{ Ms}$

In one month Inflow volume =  $\bar{I} \Delta t = 6.0 \times 2.592 = 15.552 \text{ Mm}^3$

Outflow volume =  $\bar{Q} \Delta t = 6.5 \times 2.592 = 16.848 \text{ Mm}^3$

Input due to precipitation =  $PA = \frac{145 \times 5000 \times 100 \times 100}{1000 \times 10^6} \text{ Mm}^3 = 7.25 \text{ Mm}^3$

Outflow due to evaporation =  $EA = \frac{6.10}{100} \times \frac{5000 \times 100 \times 100}{10^6} = 3.05 \text{ Mm}^3$

Hence  $\Delta S = 15.552 + 7.25 - 16.848 - 3.05 = 2.904 \text{ Mm}^3$

Change in elevation  $\Delta z = \frac{\Delta S}{A} = \frac{2.904 \times 10^6}{5000 \times 100 \times 100} = 0.058 \text{ m}$

New water surface elevation at the end of the month =  $103.200 + 0.058$   
= 103.258 m above the datum

**Example 2 :** A small catchment of area 150 ha received a rainfall of 10.5 cm in 90 minutes due to a storm. At the outlet of the catchment, the stream draining the catchment was dry before the storm and experienced a runoff lasting for 10 hours with an average discharge of  $1.5 \text{ m}^3/\text{s}$ . the stream was again dry after the runoff event.

(a) What is the amount of water which was not available to runoff due to combined effect of infiltration, evaporation and transpiration?

(b) What is the ratio of runoff to precipitation?

**Solution :** The water budget equation for the catchment in a time  $\Delta t$  is

$$R = P - L$$

where  $L$  = Losses = water not available to runoff due to infiltration (causing addition to soil moisture and groundwater storage), evaporation, transpiration and surface storage. In the present case  $\Delta t$  = duration of the runoff = 10 hours.

Note that the rainfall occurred in the first 90 minutes and the rest 8.5 hours the precipitation was zero.

(a)  $P$  = Input due to precipitation in 10 hours

$$= 150 \times 100 \times 100 \times (10.5/100) = 157,500 \text{ m}^3$$

$R$  = runoff volume = outflow volume at the catchment outlet in 10 hours

$$= 1.5 \times 10 \times 60 \times 60 = 54,000 \text{ m}^3$$

Hence losses

$$L = 157,500 - 54,000 = 103,500 \text{ m}^3$$

(b) Runoff/rainfall =  $54,000/157,500 = 0.343$

## 1.4 CONVERSION OF PRECIPITATION INTO STREAM FLOW

- In hydrological studies in engineering hydrology the precipitation (rainfall) is taken as input mathematically in the form of hyetograph (Hyetograph is a plot of rainfall intensity against time).
- Output is obtained as stream flow runoff mathematically in the form of hydrograph (Hydrograph is a plot of discharge (flow) against time).

The figure given below shows the conversion of rainfall (input) to stream flow (output)

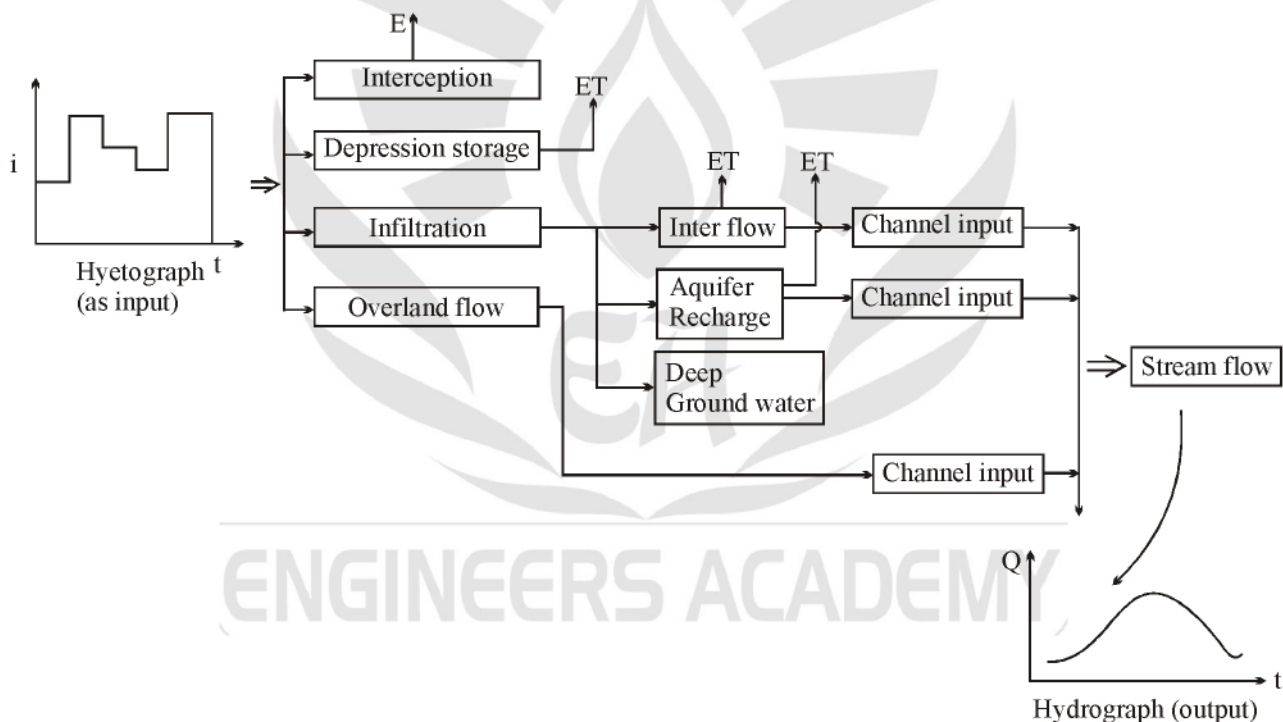


Fig. 1.4 : Distribution of precipitation

### Interesting Facts

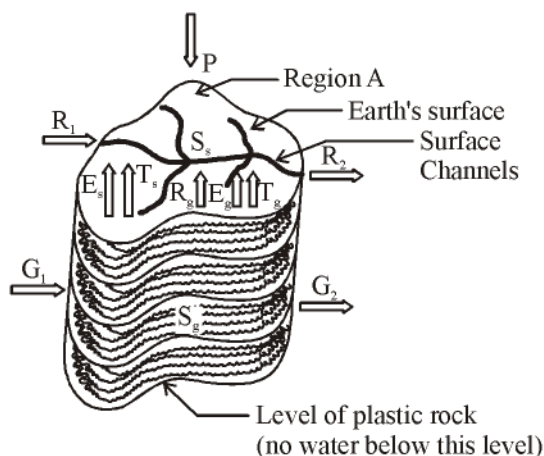
- Runoff is minimum in Africa and maximum in Europe and North America.
- In India the long term estimates of average runoff = 46%.
- In the ocean about 9% more water evaporates that falls back as precipitation.
- World's largest river, the Amazon, has an annual average discharge of  $200,000 \text{ m}^3/\text{s}$ .
- In India largest rivers, the Brahmaputra –  $16,200 \text{ m}^3/\text{s}$  the Ganga :  $15,600 \text{ m}^3/\text{s}$ .

○○○



## OBJECTIVE QUESTIONS

1. Regional hydrological cycle is shown in the figure



The correct hydrological budget equation is

- (a)  $P + R_1 + R_2 + R_g - E_s - T_s - I = \Delta S_s$   
 (b)  $I + G_1 - G_2 + R_g - E_s - T_g = \Delta S_s$   
 (c)  $P - (R_2 - R_1) - (E_s + E_g) - (T_s + T_g) - (G_2 - G_1) = \Delta (S_s + S_g)$   
 (d)  $P + R + G + E - T = \Delta S_s$
2. The quantitative statement of the balance between water gains and losses in a certain basin during a specified period of time is known as among the following?
1. Water budget
  2. Hydrologic budget
  3. Ground budget
- (a) 1 Only                      (b) 2 Only  
 (c) 3 Only                      (d) None of these
3. What is the chemical symbol for ice as per UNESCO terminology
- (a)  $H_8O_4$                       (b)  $H_2O$   
 (c)  $H_6O_3$                       (d)  $H_4O_2$
4. What is 'Hydrological Cycle' ?
- (a) Process involved in the transfer of moisture from sea to land
  - (b) Process involved in the transfer of moisture from sea back to sea again
  - (c) Processes involved in the transfer of water from snowmelt in mountains to sea
  - (d) Processes involved in the transfer of moisture from sea to land and back to sea again

5. Which of the following are pertinent to the realization of hydrological cycle?

1. Latitudinal difference in solar heating of the Earth's surface
  2. Inclination of the Earth's axis
  3. Uneven distribution of land and water
  4. Coriolis effect
- (a) 1, 2 and 3 only    (b) 1, 2 and 4 only  
 (c) 2, 3 and 4 only    (d) 1, 2, 3 and 4
6. The plan area of a reservoir is  $1 \text{ km}^2$ . The water level in the reservoir is observed to decline by 20 cm in a certain period. During this period the reservoir receives a surface inflow of 10 hectare-meters, and 20 hectare meters are abstracted from the reservoir for irrigation and power. The pan evaporation and rainfall recorded during the same period at a nearby meteorological station are 12 cm and 3 cm respectively. The calibrated pan factor is 0.7. The seepage loss from the reservoir during this period in hectare meters is
- (a) 0.0                      (b) 1.0  
 (c) 2.4                      (d) 4.6
7. In the hydrological cycle the average residence time of water in the global
- (a) Atmospheric moisture is larger than that in the global rivers
  - (b) Oceans is smaller than that of the global groundwater
  - (c) Rivers is larger than that of the global groundwater
  - (d) Oceans is larger than that of the global groundwater
8. A watershed has an area of 300 ha. Due to a 10 cm rainfall event over the watershed a stream flow is generated and at the outlet of the watershed it lasts for 10 hours. Assuming a runoff/ rainfall ratio of 0.20 for this event, the average stream flow rate at the outlet in this period of 10 hours is
- (a)  $1.33 \text{ m}^3/\text{s}$                       (b)  $16.7 \text{ m}^3/\text{s}$   
 (c)  $100 \text{ m}^3/\text{minute}$                       (d)  $60,000 \text{ m}^3/\text{h}$

9. Rainfall of intensity of 20 mm/h occurred over a watershed of area 100 ha for a duration of 6h. measured direct runoff volume in the stream draining the watershed was found to be 30,000 m<sup>3</sup>. The precipitation not available to runoff in this case is
- (a) 9 cm                      (b) 3 cm  
(c) 17.5 mm                (d) 5 mm
10. A catchment of area 120 km<sup>2</sup> has three distinct zones as below
- | Zone | Area (km <sup>2</sup> ) | Annual runoff (cm) |
|------|-------------------------|--------------------|
| A    | 61                      | 52                 |
| B    | 39                      | 42                 |
| C    | 20                      | 32                 |
- The annual runoff from the catchment, is
- (a) 126.0 cm                (b) 42.0 cm  
(c) 45.4 cm                (d) 47.3 cm

○○○



## ANSWERS AND EXPLANATIONS

1. **Ans. (c)**

The hydrologic budget equation is

$$P - R - E - T - G = \Delta S$$

Where

P = Total precipitation

R = Net runoff =  $R_2 - R_1$

= Surface runoff outflow – Surface runoff inflow

E = total evaporation

T = total Transpiration

G = net ground water flow

= Ground water outflow – Ground water inflow

$\Delta S$  = total storage increase

$\therefore$  The equation becomes

$$P - (R_2 - R_1) - (E_s + E_g) - (T_s + T_g) - (G_2 - G_1)$$

$$= \Delta(S_s + S_g)$$

$\therefore$  correct option is (c)

2. **Ans. (a)**

For a particular basin or catchment the equation showing the water gains and losses during a specified period of time is called water budget equation.

3. **Ans. (b)**

Chemical symbol of ice as per UNESCO is  $H_2O$ .

4. **Ans. (d)**

Hydrological cycle is the cycle in which water is transported from the oceans to the atmosphere as vapours, from the atmosphere to the land as precipitation and back from land to oceans as runoff.

5. **Ans. (b)**

It make no difference whether the distribution of land and water is even or uneven.

6. **Ans. (d)**

Inflow to reservoir

$$I = 10 \text{ ha-m}$$

Outflow from reservoir, O = 20 ha-m

Loss due to evaporation

$$E = 12 \text{ cm} \times \text{pan coefficient} \times \text{Area} \\ = 12 \times 10^{-2} A \times 0.7$$

$$= 12 \times 10^{-2} \times 10^6 \times 0.7$$

$$= 8.4 \times 10^4 \text{ m}^3 = 8.4 \text{ ha-m}$$

Rainfall,

$$P = 3 \text{ cm}$$

$$= 0.03 \times 10^6 \text{ m}^3$$

$$= 3 \times 10^4 \text{ m}^3 = 3 \text{ ha-m}$$

Change in storage

$$\Delta S = -20 \text{ cm}$$

$$= -0.20 \times 10^6 \text{ m}^3 = -20 \text{ ha-m}$$

In flow – outflow = change in storage

$$(I + P) - (O + E + \text{seepage}) = -20$$

$$(10 + 3) - (20 + 8.4 + \text{seepage}) = -20$$

$$\text{Seepage} = 4.6 \text{ ha-m}$$

7. **Ans. (d)**

8. **Ans. (c)**

$$\text{Total rainfall volume} = 300 \times 10^4 \text{ m}^2 \times 10 \text{ cm} \\ = 300,000 \text{ m}^3$$

$$\therefore \frac{\text{runoff}}{\text{rainfall}} = 0.2$$

$$\Rightarrow \text{runoff} = 0.2 \times \text{rainfall} \\ = 0.2 \times 300,000 \text{ m}^3$$

$$\text{runoff rate} = \frac{0.2 \times 300,000 \text{ m}^3}{10 \times 60} \\ = 100 \text{ m}^3/\text{minute}$$

9. **Ans. (c)**

$$\text{Total rainfall volume} = 6 \times 20 \text{ mm} \times 100 \text{ ha} \\ = 12000 \text{ ha-mm} = 120,000 \text{ m}^3$$

$$\text{Direct runoff volume} = 30,000 \text{ m}^3$$

The precipitation not available is

$$= 120,000 - 30,000 \text{ m}^3$$

$$= 90,000 \text{ m}^3$$

$$80 = \frac{90000 \text{ m}^3}{100 \times 10^4 \text{ m}^2 \times 20 \times 10^{-3} \text{ m}} \\ = 9 \text{ cm}$$

10. **Ans. (c)**

The annual runoff from the catchment

$$= \frac{61 \times 52 + 39 \times 42 + 20 \times 32}{61 + 39 + 20}$$

$$= 45.41 \text{ cm}$$

○○○

# 2

## CHAPTER

# Precipitation and Its Measurements

## THEORY

### 2.1 PRECIPITATION

The term precipitation denotes the all forms of water that reaches the earth from the atmosphere. The usual forms are rainfall, snowfall, hail, frost and dew.

### 2.2 FORMS OF PRECIPITATION

- Rain** : In form of water drops of sizes larger than 0.5 mm and smaller than 6 mm
  - Light rain – trace to 2.5 mm/hr
  - Moderate rain – 2.5 mm/h to 7.5 mm/h
  - Heavy rain - > 7.5 mm/hr
- Snowfall** : The fall of larger snowflakes from the clouds on the ground surface is called snowfall. In fact snowfall is “Precipitation of white and opaque grains of ice. The average density of snow fall is 0.1 gm/cc.
- Drizzle** : A fine sprinkle of numerous water droplets of size less than 0.5 mm and intensity having less than 1 mm/hr.
- Glaze** : Water drops freeze to form an ice coating also called freezing rain.
- Sleet** : Frozen raindrops of transparent grains (when rain falls through air at subfreezing temperature) of raindrops size dia of 5 mm or lesser.
- Hail** : Showery precipitation in the form of irregular pellets or lumps of ice of size between 5 mm to 50 mm.

#### Two important processes in precipitation

ice crystal process	coalescence process
ice crystal exists with water droplets at subfreezing temp. (-40°C)	small cloud droplets increase their size due to contact with other through collisions
the dust particles (clay minerals, organic and ordinary ocean salts) serves as the freezing nuclei	fall velocity at equilibrium are proportional to the square of radius of droplets
the ice crystal grow in size	hence large size fall at greater velocity and results in collisions
with increase in size they tend to fall down due to gravity	very large droplets > 7mm diameter tend to break into small droplets
this is basis for artificial rain or cloud seeding	Very important in tropical regions.

**Characteristics of precipitation in India :** The Indian sub continent can be considered to have two major seasons and two transitional periods as :

- South-west monsoon (June-September)
- Transition-I, Post-monsoon (October-November)
- Winter season (December-February)
- Transition-II, Summer, (March-May)

Facts about Rainfall in India

- Average annual rainfall – 117 cm.
- Average annual rainfall varies from 10 cm in the western Thar desert to 110 cm in North East region.
- $C_V$  varies from 15 to 70 (standard deviation/mean).
- A few heavy spells of rain contributes almost 90% of total rainfall in India.
- More than 50% rain occurs within 15 days less than 100 hours in a year.
- At an average the number of rainy days are 52 in a year.

## 2.3 MEASUREMENT OF PRECIPITATION

One of the most crucial and least known components of the global hydrologic cycle is the precipitation that is the basic data required to estimate any hydrologic quantity (such as runoff, flood discharge *etc.*). Therefore, measurement of precipitation is an important component of all hydrologic studies. Weather and water-balance studies too require information on precipitation.

### 2.3.1 Precipitation Gauges

Precipitation (of all kinds) is measured in terms of depth of water (in mm or cm) that would accumulate on a level surface if the precipitation remained where it fall.

A variety of instruments has been developed for measuring precipitation (or precipitation rate) and are known as precipitation gauges or simply rain gauge which are classified as either recording or non-recording rain gauges.

The terms such as pluviometer, ombrometer and hyetometer are also sometimes used to designate a rain gauge.

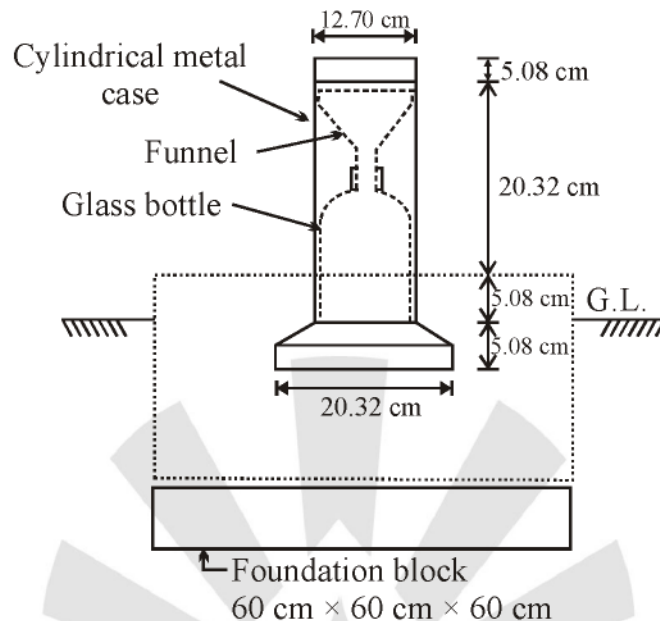
Types of rainfall gauges

1. Non-recording gauges
2. Recording gauges

#### Non-Recording Gauges

- Non-recording rain gauges only collect rain water which, when measured suitably, gives the total amount of rainfall at the rain gauge station during the measuring interval.
- The Indian Meteorological Department has adopted Symon's rain gauge.
- A glass bottle and funnel with brass rim are put in a metallic cylinder such that the top of the cylinder is 305 mm above the ground level.
- Rain water falls into the glass bottle through the funnel. The water collected in the bottle is measured with the help of a standard measuring glass jar which is supplied with the rain gauge.
- The jar measures rainfall in millimeters.

- For uniformity, the rainfall observations are taken everyday at 8 : 30 AM (IST) and is recorded as the rainfall of that day.



**Fig. 2.1 : Symon's rain gauge**

### Recording Rain Gauges

Recording rain gauges automatically record the intensity of rainfall and the time of its occurrence in the form of a trace (or graph) marked on a graph paper wrapped round a revolving drum. Following three types are the most widely used recording rain gauges :

#### (a) Tipping Bucket Type :

- This is 30.5 cm size rain gauge.
- The catch from funnel falls onto one of a pair of small buckets.
- These buckets are so balanced that when 0.25 mm rainfall collects in one bucket, it tips and brings other one in position.
- The water from these buckets connected in storage can.
- The tipping actuates an electrically driven pen to trace a record from tipping bucket gives data as intensity of rainfall.
- Output can be recorded at a distance from the rain gauge as output obtained is in electronic form.

#### (b) Weighing Bucket Type

- The catch from funnel empties into a bucket fixed on a weighing scale.
- The weight of bucket and its contents are recorded on a clock-work-driven chart.
- This type of rain gauge gives mass curve of rainfall i.e. plot of accumulated rainfall against elapsed time.

#### (c) Natural Syphon type (or float type gauge)

- In this rain gauge rainfall collected by a funnel-shaped collector is led into a float chamber causing a float to rise.
- As the float rises, a pen attached to the float through a lever system records the elevation of the float on a rotating drum driven by a clock-work mechanism.

- A Syphon arrangement empties the float chamber when the float has reached a pre-set maximum level which resets the pen to its zero level.
- This type of rain gauge is adopted as the standard recording type rain gauge in India.
- This rain gauge gives a mass curve of rainfall.

### 2.3.2 Snowfall Water Equivalent

- Water equivalent of snow is the depth of water that would result in melting of a unit of snow.
- It can be found either by weighing or melting.
- Generally density of fresh snow is assumed to be 0.10 gm/cc.
- Snow collected in a non recording rain gauge is melted immediately and measured by means of a graduated cylinder.
- The weighting type recording gauge is also used to determine the water content of snowfall.

## 2.4 RAIN GAUGE NETWORK

Bureau of Indian Standards has laid down the following guidelines for selecting the site for rain gauges (IS : 4897-1968) :

- The rain gauge shall be placed on a level ground, not upon a slope or a terrace and never upon a wall or roof.
- On no account the rain gauge shall be placed on a slope such that the ground falls away steeply in the direction of the prevailing wind.
- The distance of the rain gauge from any object shall not be less than 30 m or twice the height of the object above the rim of the gauge.
- Great care shall be taken at mountain and coast stations so that the gauges are not unduly exposed to the sweep of the wind. A belt of trees or a wall on the side of the prevailing wind at a distance exceeding twice its height shall form an efficient shelter.
- In hills where it is difficult to find a level space, the site for the rain gauge shall be chosen where it is best shielded from high winds and where the wind does not cause eddies.
- The location of the gauge should not be changed without taking suitable precautions.

As per world meteorological organization (WMO) the rain gauges should be placed as :

- In Flat regions of temperate, Mediterranean and Tropical zones
  - ✧ Ideal – 1 station for 600-900 km<sup>2</sup>
  - ✧ Acceptable – 1 station for 900-3000 km<sup>2</sup>
- In Mountainous regions of temperate, Mediterranean and tropical zones
  - ✧ Ideal – 1 station for 100-250 km<sup>2</sup>
  - ✧ Acceptable – 1 station for 25-1000 km<sup>2</sup>
- In Arid and polar zones
  - ✧ 1 station for 1500-10,000 km<sup>2</sup> depending on the feasibility.
- 10% of rain gauge stations should be equipped with self recording gauges to know the intensities of rainfall.

From practical considerations in Indian conditions, the Indian standard (IS : 4987-1968) recommends the following densities as sufficient.

- In plains : 1 station per 250 km<sup>2</sup>.
- In regions of average elevation 1000 m : 1 station per 260-390 km<sup>2</sup>.
- In hilly areas with heavy rainfall : 1 station per 130 km<sup>2</sup>.

### 2.4.1 Adequacy of Rain Gauge Stations

For an existing network of raingauge stations, one may need to know the adequacy of the raingauge stations and therefore the optimal number of raingauge stations  $N$  required for a desired accuracy (or maximum error in per cent,  $\epsilon$ ) in the estimation of the mean rainfall.

$$\bar{P} = \frac{1}{m} \left( \sum_{i=1}^m P_i \right)$$

Where,  $\bar{P}$  = mean precipitation

$$\sigma_{m-1} = \text{standard deviation} = \sqrt{\frac{\sum_{i=1}^m (p_i - \bar{P})^2}{m-1}}$$

Where,  $P_i$  = precipitation measured at  $i^{\text{th}}$  station

$m$  = number of raingauge station

The optimal number of raingauge stations  $N$  is given as

$$N = \left( \frac{C_v}{\epsilon} \right)^2$$

Where,  $N$  = Optimal number of stations

$\epsilon$  = Allowable degree of error in the estimate of the mean rainfall

$C_v$  = the coefficient of variation of the rainfall values at the existing  $m$  stations (in percent) and  $C_v$  calculated as

$$C_v = \frac{100 \times \sigma_{m-1}}{\bar{P}}$$

- For calculating  $N$ ,  $\epsilon$  is usually taken as 10%. Obviously, the number  $N$  would increase with the decrease in allowable error,  $\epsilon$ .
- The coefficient of variation of the annual rainfall for different places may vary between 15 (for regions of high rainfall) and 70 (for regions of scanty rainfall) with an average value of about 30.

**Example 1 :** A catchment has six raingauge stations. In a year, the annual rainfall recorded by the gauges are as follows :

Station	A	B	C	D	E	F
Rainfall (cm)	82.6	102.9	180.3	110.3	98.8	136.7

For a 10% error in the estimation of the mean rainfall, calculate the optimum number of stations in the catchment.

**Solution :** For given data,  $m = 6$ ,  $\epsilon = 10\% = 0.1$

Now calculation of  $\bar{P}$ ,  $\sigma_{m-1}$  and  $C_v$  is required

**Step 1 :** Calculation of mean rainfall ( $\bar{P}$ )

$$\begin{aligned} \bar{P} &= \frac{82.6 + 102.9 + 180.3 + 110.3 + 98.8 + 136.7}{6} \\ &= 118.6 \text{ cm} \end{aligned}$$



**Step 2 :** Calculation of  $\sigma_{m-1}$ , (Standard deviation)

$$\sigma_{m-1} = \sqrt{\frac{\sum_{i=1}^m (P_i - \bar{P})^2}{m-1}} \quad \text{or} \quad \sigma_{m-1}^2 = \frac{\sum_{i=1}^m (P_i - \bar{P})^2}{(m-1)}$$

$$\sigma_{m-1}^2 = \frac{(118.6-82.6)^2 + (118.6-102.9)^2 + (118.6-180.3)^2 + (118.6-110.3)^2 + (118.6-98.8)^2 + (118.6-136.7)^2}{6-1}$$

or  $\sigma_{m-1}^2 = 1227.80$

or  $\sigma_{m-1} = 35.04$

**Step 3 :** Calculation of coefficient of variation ( $C_v$ )

$$C_v = \frac{\sigma_{m-1}}{\bar{P}} \times 100 = \frac{35.04}{118.6} \times 100 = 29.54$$

**Step 4 :** Optimal number of stations (N)

$$N = \left( \frac{C_v}{\epsilon} \right)^2 = \left( \frac{29.54}{0.1} \right)^2 = 8.7, \text{ say } 9 \text{ stations}$$

Hence optimum number of raingauge stations for the catchment is 9.

Hence three more stations are required.

### Normal Precipitation

- The normal precipitation (rain fall) is the average value of rain fall of a particular date, month or year over a specified 30 year period (for e.g. normal rainfall of 7th July or normal rainfall of August or yearly rain fall).
- The 30 year normal rainfall are recomputed every decade to account for change in environment and land use, because these factors may affect the amount of rainfall on that area.
- Normal rainfall is used to estimate missing data of certain raingauges.

### Average Annual Rainfall

- The amount of rain fall collected by a rain gauge in the last 24 hours is called as daily rainfall and the total amount collected in 1 year in called annual rainfall.
- Average annual rainfall is the average value of annual rainfall values for the last 35 years.

## 2.5 PREPARATION OF PRECIPITATION DATA

Precipitation data must be checked for the continuity and consistency before they are analyzed for any significant purpose. This is essential when it is suspected that the gauge site (or its surroundings) might have changed appreciably during the period for which the average is being computed.

### 2.5.1 Estimation of Missing Data

The continuity of a record may be broken with missing data due to many reasons such as damage or fault in a raingauge during a period.

Assuming the annual precipitations values  $P_1, P_2, P_3, P_4 \dots P_m$  at neighboring M stations 1, 2, 3 .... m respectively.

Now we have to find missing annual precipitation  $P_x$  at a station X not included in the above M stations. Further, normal annual precipitations  $N_1, N_2 \dots N_i$  at each of the above (M + 1) stations including station X are known then two cases arises :

**(A) Arithmetic mean method :** If the normal annual precipitations at various stations are within 10% of the normal annual precipitation at station X, then a simple arithmetic average procedure is followed to estimate  $P_x$ . Thus

$$P_x = \frac{1}{M} [P_1 + P_2 + \dots + P_n]$$

**(B) Normal ratio method :** If normal precipitations vary considerably then normal ratio method is used (i.e. normal precipitation at any of these stations is more than 10% of that for station with missing data). Then

$$P_x = \frac{N_x}{M} \left[ \frac{P_1}{N_1} + \frac{P_2}{N_2} + \dots + \frac{P_m}{N_m} \right]$$

Where,  $P_x$  = precipitation (missing data)

$N_x$  = normal precipitation of the station at which data is missing

**Example 2 :** The normal annual rainfall at stations A, B, C and D in a basin are 80.97, 67.59, 76.28 and 92.01 cm respectively. In the year 1975, the station D was inoperative and the stations A, B and C recorded annual precipitations of 91.11, 72.23 and 79.89 cm respectively. Estimate the rainfall at station D in that year.

**Solution :** As the normal rainfall values vary more than 10%, the normal ratio method is adopted.

Normal ratio method 
$$P_x = \frac{N_x}{M} \left[ \frac{P_1}{N_1} + \frac{P_2}{N_2} + \dots + \frac{P_m}{N_m} \right]$$

So, here  $N_x = N_D = 92.01$  cm normal precipitation at station D

$$M = 3,$$

So 
$$P_D = \frac{92.01}{3} \left[ \frac{91.11}{80.97} + \frac{72.23}{67.59} + \frac{79.89}{76.28} \right] = 99.48 \text{ cm}$$

**Example 3 :** The normal annual rainfall of stations A, B, C and D in a catchment is 80 mm, 91 mm, 85 mm and 87 mm respectively.

In the year 2007, the station D was inoperative when stations A, B and C recorded annual rainfall of 91.11, 72.23 and 78.29 mm. Estimate the missing data at station D in the year 2007.

**Solution :** First to check whether Normal precipitation of all the station A, B and C are within 10% of that at station D.

So,  $87 \left\{ \begin{array}{l} \rightarrow 87 \times 1.1 = 95.7 \\ \rightarrow 87 \times 0.9 = 78.3 \end{array} \right. \left. \begin{array}{l} \updownarrow \\ \text{Hence there are within 10\%} \end{array} \right.$

So, Arithmetic mean method is used.

$$\Rightarrow P_D = \frac{P_1 + P_2 + P_3 + \dots + P_m}{m}$$

$$\Rightarrow \frac{91.11 + 72.23 + 79.89}{3} = 81.08 \text{ mm}$$